

## Owl Class Year 1 home learning pack Friday 15th January




Please see page 2 onwards for resources to support this learning.  
**You do not need to print the sheets, you can use any pieces of paper to complete the work**—the attached are for guidance.

## Email

Please email all questions **and finished work** (scans or photographs) to this address:

owlhomework@corvuseducation.com



Phonics/ handwriting	 English	 Maths	 Topic
<p>Watch phonics <a href="#">lesson 39</a> looking at the /u/ sound.</p> <p>On <a href="#">Phonics Play</a> play Space Race. You need to click in the spaces to type the words. This is to practice your segmenting and blending skills.</p> <p>After logging on (u/n: jan21 p/w: home) Select resources, phase 4, then scroll down to 'Space Race'. You can try either phase 3 or phase 4.</p> <p>Handwriting</p> <p>See page 3 for today's handwriting.</p>	<p>Practise telling the poem (copy on page 3)—remember to use your actions to help you.</p> <p>Today we are going to put some of your ideas into phrases for the poem. There is a sheet on page 3 you can use for the activity if you wish.</p> <p>Look back at your three favourite sounds you choose yesterday of things you hear in the dark/at night.</p> <p>I chose: a door, an owl and a fire engine.</p> <p>Today you need to think what these things (nouns) are doing. We have looked at doing words before—they are called verbs.</p> <p>So..</p> <p>My owl could be—hooting, swooping, flying, eating, diving, flapping or even sitting.</p> <p>Pick one of your nouns from yesterday and think of as many verbs as you can for what it could be doing. To help you say "The owl is _____ in the night" This way you can check you have chosen a verb and not an adjective (describing word).</p> <p>Repeat this for all 3 of your nouns and keep safe until Monday.</p>	<p>There is a video <a href="#">here</a> for today—please watch 'Compare Number Bonds.</p> <p>There are some questions to complete on page 4 and a ten frame on page 5.</p> <p>Well done for a fantastic week of maths this week.</p> <p>As an extra challenge:</p> <p>Find a space and choose an action (star jump/hopping/clapping etc)</p> <p>Count up in 1s to 20, and back then count up in 2s to 20 and back saying one number for every movement you make.</p> <div style="border: 1px dashed black; padding: 5px; margin: 10px 0;"> <p style="text-align: center;"><b>Maths Board</b></p> <p>Feeling wobbly: Side A, Number 3</p> <p>Feeling confident: Side B, Number 13</p> </div>	<p>In RE this half term we are answering questions about special times to different people.</p> <p>Today's question is:</p> <p><i>Think of a special time for you and your family how do you celebrate or mark it?</i></p> <p>Look through photographs/records you have kept as a family of this special time—what did you do to celebrate?            Did you have special food?            Did you have special clothes?            Did you give/get presents?            Did you have cake?</p> <p>Draw a picture or make a photo collage of this special time and label it with sentences to say how you celebrated.</p> <p>Do you think all celebrations are the same for everyone?</p>

nl nl

nlr nlr

nlrl nlrl


nk nk

rp rp

nm nm

bh bh

Jenny put her pink pen in her bag.



## *Night Sounds*

When I lie in bed  
I think I can hear  
The stars being switched on  
I think I can.

And I think I can hear  
The moon  
Breathing.

But I have to be still.  
So still.  
All the house is sleeping.  
Except for me.

Then I think I can hear it.

BERLIE DOHERTY



Friday 15th January 2021

Can I collect verbs for my nouns?

What were your 3 favourite sounds from yesterday?

The \_\_\_\_\_ is \_\_\_\_\_ in the night.

Verbs



Friday 15th January 2021

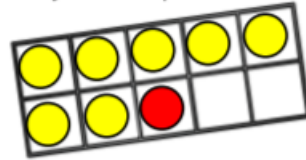
Can I compare number bonds?

Match the number bonds that are equal.

Can you use ten frames and counters to prove they are equal?

4 + 5

7 + 1



2 + 6

6 + 3

4 + 2

3 + 3

Teddy has 5 counters in his hand and some in a cup.



Tommy has 3 counters in his hand and some in a cup.



They each have the same number of counters in total.

They each have less than 10 counters.


How many counters could be in Teddy's cup?

How many counters could be in Tommy's cup?


Amir and Whitney have both created their own number bonds.



My total is greater because I have a 5 and a 3



My total is greater because I have 9 altogether.



Who do you agree with?  
Explain your answer.

Here is some fruit.



5p



6p



4p



5p



6p



4p

Kim buys an apple and some grapes.

How much does Kim spend?