

Owl Class Year 1 home learning pack Monday 18th

January




Please see page 2 onwards for resources to support this learning. **You do not need to print the sheets, you can use any pieces of paper to complete the work**—the attached are for guidance.

Email

Please email all questions **and finished work** (scans or photographs) to this address:

[owlhomework@corvuseducation.com](mailto:owlhomework@corvuseducation.com)



Phonics/ handwriting	 English	 Maths	 Science																																																		
<p>Watch phonics <a href="#">lesson 40</a> reviewing what we have learned recently.</p> <p>Read the reading comprehension on page 2 and answer the questions. Sound out as many words as you can to read the text and ask for help with the ones you can't do alone.</p> <p>Handwriting</p> <p>See page 3 for today's handwriting.</p>	<p>Practise telling the poem (copy on page 3)—remember to use your actions to help you.</p> <p>Today we are going to turn the ideas you had last week into your poem. Look back at your <b>nouns</b> and the <b>verbs</b> you came up with. You need to choose your favourite verb for each noun. I have chosen</p> <p><b>owl</b>                      <b>hooting</b>  <b>door</b>                    <b>slamming</b>  <b>fire engine</b>            <b>racing</b></p> <p>You are now going to put them into our poem sentence structure:</p> <p>I think I can hear          An <b>owl</b> <b>hooting</b></p> <p>Use the structure on page 4 to help put your poem together.</p> <p>As an extra challenge: <b>Can you add more detail to your phrase:</b>          I think I can hear</p>	<p>Today's video can be found <a href="#">here</a>. "Add by making 10"</p> <p>We are learning that one way of adding two numbers together is to make 10 and then add on those that are left over. There are questions on page 5.</p> <p>We use a ten frame (or this week 2 ten frames as we are adding to 20) and counters or whatever you can find to place in them.</p> <p>Extra challenge:</p> <p>Draw counters to show that 5 + 6 is the same as 10 + 1</p> <div style="display: flex; justify-content: space-around;"> <table border="1" style="border-collapse: collapse; width: 40px; height: 40px;"> <tr><td> </td><td> </td><td> </td><td> </td><td> </td></tr> <tr><td> </td><td> </td><td> </td><td> </td><td> </td></tr> <tr><td> </td><td> </td><td> </td><td> </td><td> </td></tr> <tr><td> </td><td> </td><td> </td><td> </td><td> </td></tr> <tr><td> </td><td> </td><td> </td><td> </td><td> </td></tr> </table> <table border="1" style="border-collapse: collapse; width: 40px; height: 40px;"> <tr><td> </td><td> </td><td> </td><td> </td><td> </td></tr> <tr><td> </td><td> </td><td> </td><td> </td><td> </td></tr> <tr><td> </td><td> </td><td> </td><td> </td><td> </td></tr> <tr><td> </td><td> </td><td> </td><td> </td><td> </td></tr> <tr><td> </td><td> </td><td> </td><td> </td><td> </td></tr> </table> </div> <div style="border: 1px dashed black; padding: 5px; text-align: center;"> <p><b>Maths Board</b></p> <p>Feeling wobbly: Side A, Number 5</p> <p>Feeling confident: Side B, Number 8</p> </div>																																																			<p>On a piece of paper write down as many types of weather as you can, challenge a grown-up to see if you can think of more than they can. Now watch <a href="#">this clip</a> to see if there are any you didn't get.</p> <p>What is the weather like today?          Is the weather always the same?          Are there some weathers that only happen in certain seasons?          Does the weather stay the same all day long?</p> <p>This week you are going to keep a weather diary. You can keep this in any way you want—a diary, a chart, a photo log—it's completely up to you. Please send me your findings at the end of the week.</p> <p>How many days were there when it rained?          How many days were there when it was sunny?          What was the most popular weather type this week?          What weather did you not see this week?</p> <p>Extra challenge: Can you learn one of these <a href="#">weather rhymes</a>.</p>

# Winter

Winter is one of the four seasons of the year.  
The other seasons are autumn, spring and summer.

## Did You Know...?

- Winter is December, January and February in the UK.
- Winter is June, July and August in Australia.

## Weather in Winter

It is cold in winter. Sometimes it rains but sometimes it snows.  
When it snows, you can make a snowman or go sledging down a big hill.

## Nature in Winter

Leaves fall from trees and many animals go to sleep through the winter. These are some animals that hibernate:

• hedgehogs



• frogs



• queen bees



Some birds fly away to warmer countries in the winter.



## Questions

1. How many seasons are in one year? Tick one.  
 three  
 four  
 five
2. What is the weather like in winter? Tick one.  
 It is cold.  
 It is warm.  
 It is sunny.
3. Which animals hibernate? Tick one.  
 dogs  
 frogs  
 trees
4. Some animals do not hibernate. What do they do? Tick one.  
 Some birds fly away to colder countries.  
 Some frogs fly away to warmer countries.  
 Some birds fly away to warmer countries.
5. Which months are winter in Australia? Tick **two**.  
 December  
 June  
 August

VVV VVV

WWW WWW

XXX XXX

ZZZ ZZZ

We saw a very big zebra at  
the zoo.

He was having an x-ray.



Monday 18th January 2021

Can I write my own poem about the dark?

When I lie in bed

I think I can hear

---

I think I can hear

---

I think I can hear

---

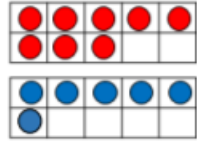
But I have to be still

Everyone is sleeping

Except for me.



Dexter uses ten frames to calculate eight plus six.



He says,



$$8 + 6 = 16$$

Do you agree?  
Explain why.



Choose a chilli challenge and use the ten frame to help you to solve the questions—remember to make sure that you fill one ten frame first before beginning to fill the next.

**Mild:**  $9 + 3$     $7 + 4$     $5 + 6$     $9 + 2$     $7 + 5$

**Warm:**  $9 + 8$     $8 + 8$     $9 + 6$     $9 + 9$     $7 + 9$

**Hot:**  $8 + 3 = 10 + \underline{\quad}$     $9 + 7 = 10 + \underline{\quad}$

$7 + 5 = 10 + \underline{\quad}$     $6 + 8 = 10 + \underline{\quad}$

Remember = means 'the same as' so  $8 + 3$  is the same as  $10 + ?$