
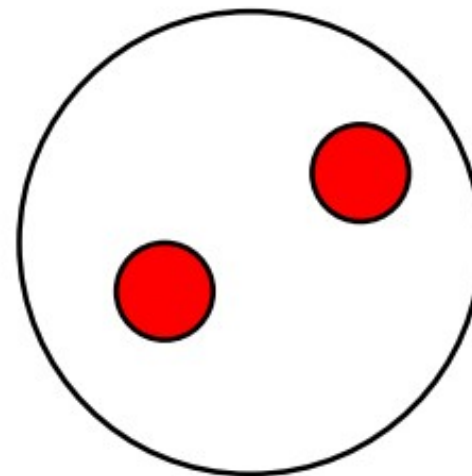
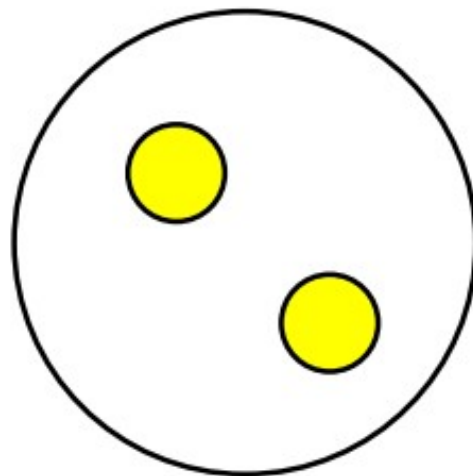


True or False ?

Introducing parts and wholes



All the objects have been put in the groups.



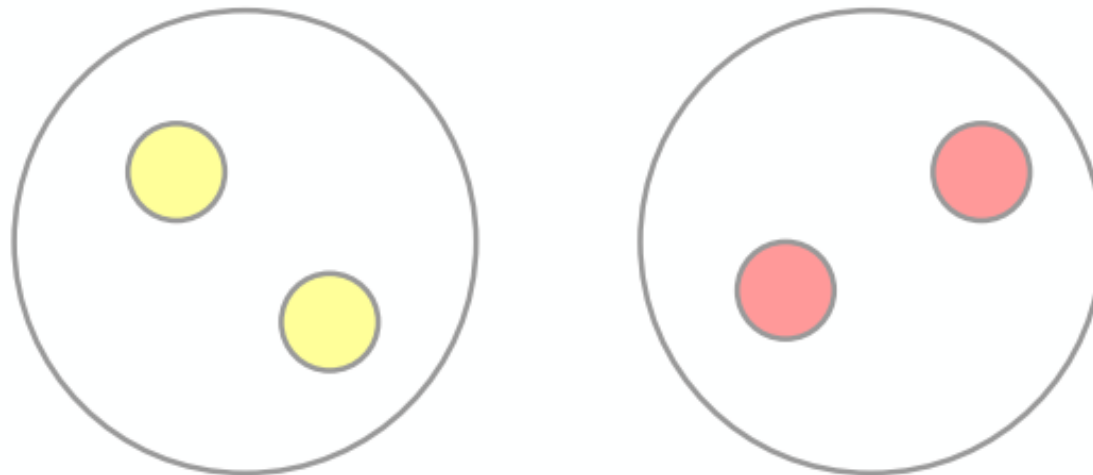
True or False ?

Introducing parts and wholes

This is not true.
There are 3 yellow spots and 2 red spots but when they have been sorted there are only 2 yellow spots in the group.





All the objects have been put in the groups.



Thursday 7th January 2021

Can I halve a number?

Today, we are looking at halving. Have a look at these pictures. What do you think halving could mean?

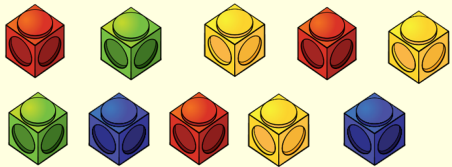


Halving is when one thing or amount is turned into two equal amounts.


You are dividing or sharing by 2.

Thursday 7th January 2021

Can I halve a number?



Can you work out what
half of these amounts
are?




half of _____ is _____

Thursday 7th January 2021

Can I halve a number?

- 1) Choose a number under 20 and find half of it.
- 2) Use counters or cubes or pasta or anything you can find to help you.
- 3) Find half by sharing the counters into two equal groups.
- 4) Write your answer like this:

Half of _____ is _____.



Extra challenge: Can all numbers be halved?

What is the magic rule for halving?

Thursday 7th January 2021

Can I halve a number?

What is the rule for halving?

Let's see what numbers you can half
now (link on the sheet too!)

<https://www.topmarks.co.uk/maths-games/hit-the-button>