

## Owl Class Year 1 home learning pack Friday 5th February




Please see page 2 onwards for resources to support this learning.  
**You do not need to print the sheets, you can use any pieces of paper to complete the work**—the attached are for guidance.

## Email

Please email all questions **and finished work** (scans or photographs) to this address:

owlhomework@corvuseducation.com



Phonics/ handwriting	 English	 Maths	Science
<p>Miss Howes would like you to watch <a href="#">Lesson 52</a> . In this lesson you will be recapping all the ways you can say 'o' including the split diagraph o-e learned earlier this week: oa/oa, o, o-e.</p> <p>Look on page 2 for a follow up activity.</p> <p>Handwriting</p> <p>See page 2</p>	<p>Listen back to the story we started all our work on this half term—The Dark by Lemony Snicket.</p> <p>Can you draw a story map for the story? (a story map example is included on page 3). What happened and in what order?</p> <p>We are going to finish our work on this story by reviewing it.</p> <p>Begin by talking about the questions below. The focus should be on giving reasons for your answers:</p> <p><i>What did you like and/or dislike?</i> <i>Did anything surprise you? Why?</i> <i>Did you find anything particularly interesting? Why?</i> <i>Did the story remind you of anything in real life or in other stories?</i></p> <p>Fill in the book recommendation on page 3.</p>	<p>Today we are going to practice numbers to 50 again. We are going to start with a game of bingo. Draw a grid like the one below. Listen to the audio track for instructions on how to choose your numbers and the rest of the game.</p> <div data-bbox="1104 786 1485 1066" style="text-align: center;"></div> <p>Now have a go at the problem solving questions on page 4.</p> <div data-bbox="1099 1289 1579 1481" style="border: 1px dashed black; padding: 5px; margin-top: 10px;"><p style="text-align: center;"><b>Maths Board</b></p><p>Feeling wobbly: Side A, Number 6</p><p>Feeling confident: Side B, Number 11</p></div>	<p>As well as different plants, different foods grow at different times of the year. This is called seasonality.</p> <p>Can you name some foods that grow well in different seasons. Watch <a href="#">this clip</a> about where some food comes from.</p> <p>Talk about some exotic fruits and where they come from. Why are some grown in other countries?</p> <p>Look at some food labels in your kitchen, both fresh and pre-packed such as tins/packets and find out where your food comes from?</p> <p>Can you find it on a map?</p> <p>Make a list of the ones that you find and mark the places on a World map (see page 5).</p>

Phonics:

Below are some words with the o sound. Circle the correct spelling for these o words.  
Pick your favourite word from the list and write it in a sentence .



coat  
cowt



post  
poest



open  
opean



hope  
hoape

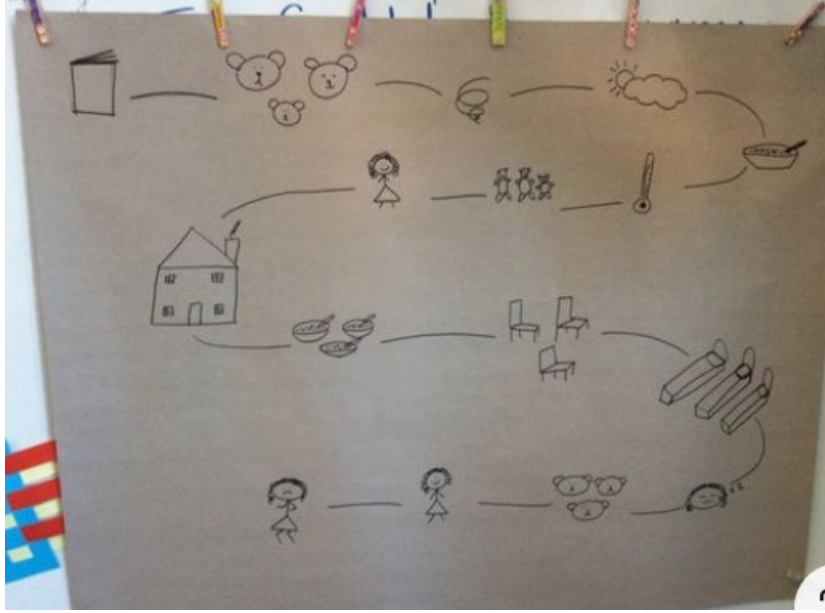


globe  
gloab



goat  
gote

Story map example:



<p><b>A book review by</b> _____</p> <p><b>Title:</b></p> <p><b>Author:</b></p> <p><b>What was the story about?</b></p> <p><b>Who were the characters?</b></p>	<p><b>What was your favourite part?</b></p> <p><b>Draw a picture from the book:</b></p> <p><b>Your star rating for this book:</b></p> <p>☆☆☆☆☆</p>
--	--

© Copyright 2011, www.sparkbox.co.uk



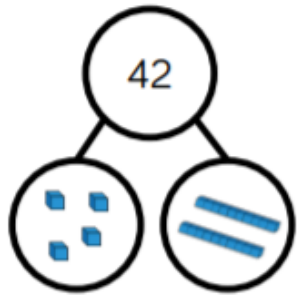
Dora and Amir both try to build the same number.



Dora



Amir



Who is correct?

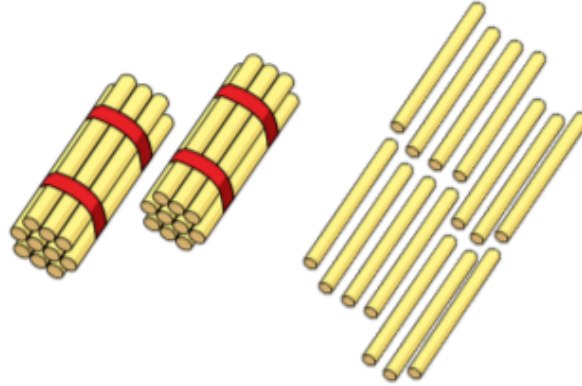
Can you explain the mistake that has been made?

Whitney says,



I have 2 tens and 14 ones.

How many straws does Whitney have?



Choose the correct numbers to make the sentences correct.

- |    |    |    |    |
|----|----|----|----|
| 28 | 26 | 33 | 45 |
| 36 | 43 | 35 | 49 |

is one less than 27

34 is one less than

is one more than 44

50 is one more than

Ron and Whitney are counting.

Ron says:



43, 42, 41, 40, 41, 42

Whitney writes:

10 11 12 13 41 15



Can you spot their mistakes?

# The World

