


Counting in 8s

1. Count in 8s.


	16			40				72			
--	----	--	--	----	--	--	--	----	--	--	--

2. There are 8 hearts on each card. How many hearts are on 3 cards?




_____ hearts

3. How many hearts are on 5 cards?




_____ hearts

4. How many hearts are on 8 cards?




_____ hearts

5. How many hearts are on 4 cards?



_____ hearts

6. How many hearts are on 11 cards?




_____ hearts

Counting in 8s Answers

1. Count in 8s.


8	16	24	32	40	48	56	64	72	80	88	96
---	----	----	----	----	----	----	----	----	----	----	----

2. There are 8 hearts on each card. How many hearts are on 3 cards?




24 hearts

3. How many hearts are on 5 cards?




20 hearts

4. How many hearts are on 8 cards?




64 hearts

5. How many hearts are on 4 cards?



32 hearts

6. How many hearts are on 11 cards?




88 hearts

Counting in 8s

1. Count in 8s.

--	--	--	--	--	--	--	--	--	--	--	--

2. There are 8 hearts on each card. How many hearts are on 3 cards?



3 cards have _____ hearts altogether.

3. How many hearts are on 5 cards? Use the working out box to help you.

5 cards have _____ hearts altogether.

--

4. How many hearts are on 8 cards?

8 cards have _____ hearts altogether.

--

5. How many hearts are on 4 cards?

4 cards have _____ hearts altogether.

--

6. How many hearts are on 11 cards?

11 cards have _____ hearts altogether.

Challenge

There are 48 hearts altogether. How many cards are there?


You may use drawings to help you.

Counting in 8s **Answers**

1. Count in 8s.

8	16	24	32	40	48	56	64	72	80	88	96
---	----	----	----	----	----	----	----	----	----	----	----

2. There are 8 hearts on each card. How many hearts are on 3 cards?



3 cards have **24** hearts altogether.

3. How many hearts are on 5 cards? Use the working out box to help you.

5 cards have **40** hearts altogether.

4. How many hearts are on 8 cards?

8 cards have **64** hearts altogether.


5. How many hearts are on 4 cards?

4 cards have **32** hearts altogether.

6. How many hearts are on 11 cards?
11 cards have **88** hearts altogether.

Challenge

There are 48 hearts altogether. How many cards are there?
You may use drawings to help you.




6 cards

Counting in 8s

1. Count in 8s.

--	--	--	--	--	--	--	--	--	--	--	--

2. There are 8 hearts on each card. How many hearts are on 3 cards?



3 cards have _____ hearts altogether.

3. How many hearts are on 9 cards? Use the working out box to help you.

9 cards have _____ hearts altogether.

--

4. How many hearts are on 8 cards?

8 cards have _____ hearts altogether.

--

5. How many hearts are on 6 cards?

6 cards have _____ hearts altogether.

--

6. If there are 72 hearts, how many cards are there?

There are _____ cards.

7. If there are 96 hearts, how many cards are there?

There are _____ cards.

Challenge


If there are 16 hearts altogether, how many arrays can you make?

Counting in 8s

1. Count in 8s.

--	--	--	--	--	--	--	--	--	--	--	--

2. There are 8 hearts on each card. How many hearts are on 3 cards?



3 cards have **24** hearts altogether.

3. How many hearts are on 9 cards? Use the working out box to help you.

9 cards have **81** hearts altogether.

--

4. How many hearts are on 8 cards?

8 cards have **64** hearts altogether.

--

5. How many hearts are on 6 cards?

6 cards have **48** hearts altogether.

--

6. If there are 72 hearts, how many cards are there?

There are **9** cards.

7. If there are 96 hearts, how many cards are there?

There are **12** cards.

Challenge


If there are 16 hearts altogether, how many arrays can you make?

1×



16

1×



16